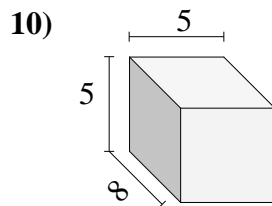
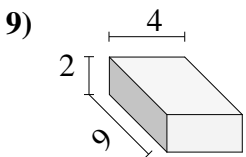
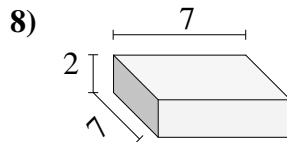
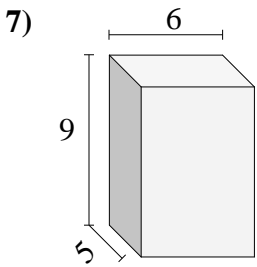
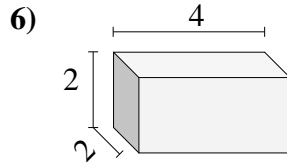
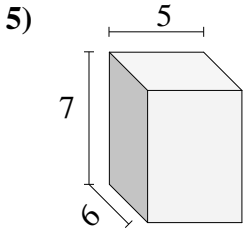
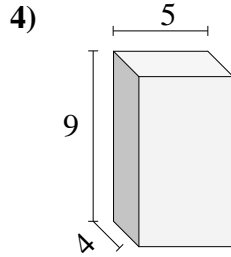
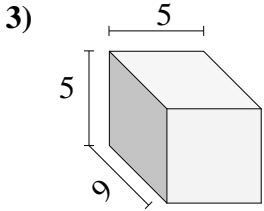
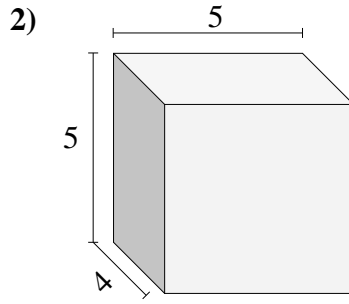
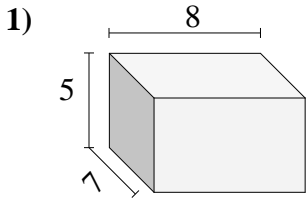


Find the volume of each of the rectangular prisms. Measured in cm (not to scale).

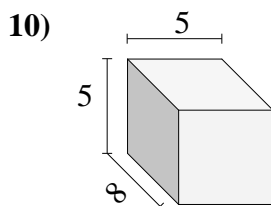
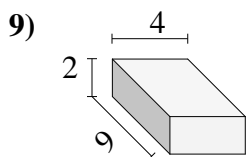
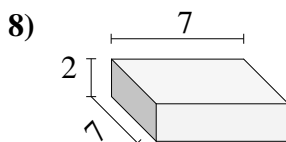
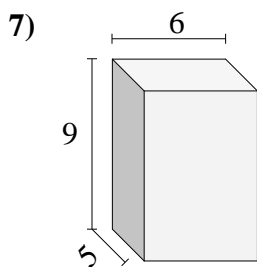
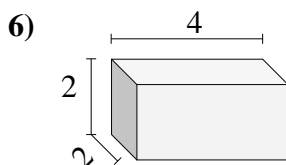
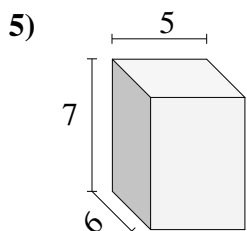
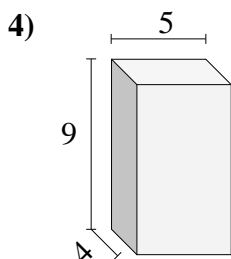
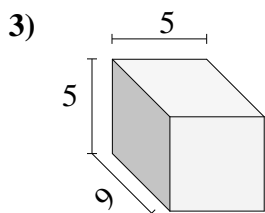
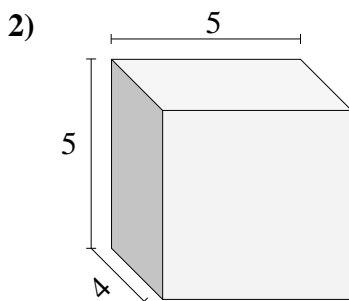
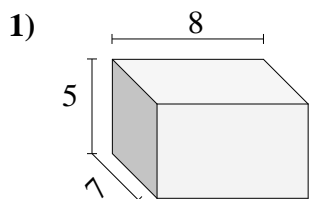


**Answers**

- 1. \_\_\_\_\_
- 2. \_\_\_\_\_
- 3. \_\_\_\_\_
- 4. \_\_\_\_\_
- 5. \_\_\_\_\_
- 6. \_\_\_\_\_
- 7. \_\_\_\_\_
- 8. \_\_\_\_\_
- 9. \_\_\_\_\_
- 10. \_\_\_\_\_



Find the volume of each of the rectangular prisms. Measured in cm (not to scale).



Answers

- 1. 280
- 2. 100
- 3. 225
- 4. 180
- 5. 210
- 6. 16
- 7. 270
- 8. 98
- 9. 72
- 10. 200